



1 **Escriba el número para cada conjunto.**

a)



b)



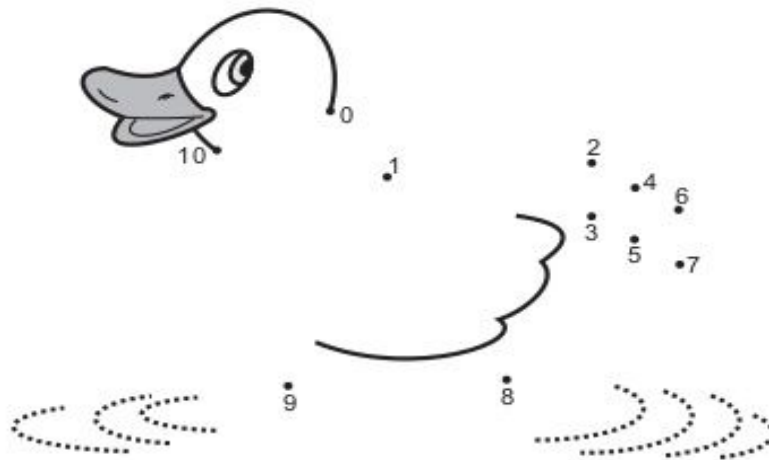
c)



d)




2 **Una los puntos contando del 0 al 10.**

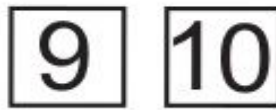


3 **Encierre en un círculo la cantidad o número mayor**

a)



b)



c)

